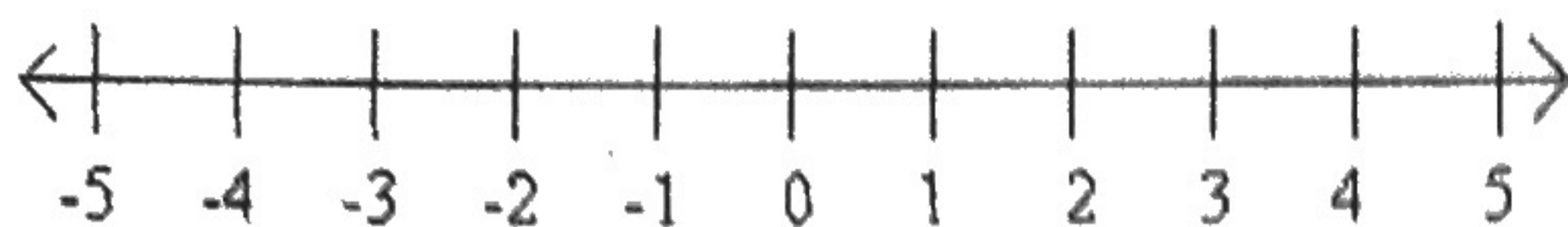
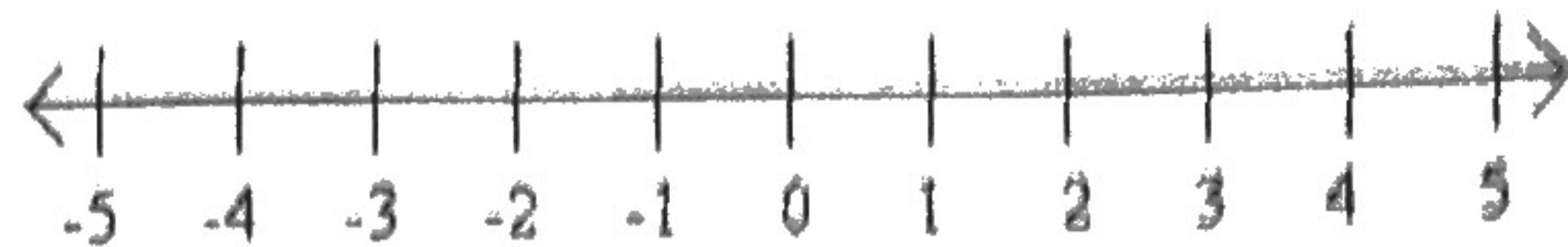


Plot the following fractions on the number line.

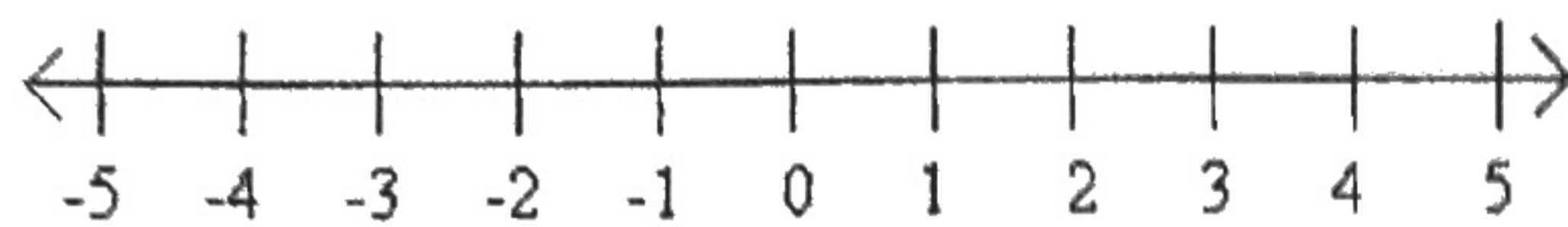
1) $-\frac{7}{4}$



2) $\frac{5}{6}$



3) $-3\frac{2}{3}$



4) $\frac{5}{2}$



5) $6 - \frac{1}{6}$

Adding + Subtracting Fractions + Mixed Numbers
Evaluate each expression.

7) $\frac{1}{5} + \frac{1}{5}$

8) $\frac{7}{6} - \frac{5}{6}$

9) $\left(-\frac{4}{5}\right) - \frac{7}{8}$

10) $\frac{1}{3} - \left(-\frac{5}{3}\right)$

11) $\left(-\frac{1}{3}\right) + \frac{3}{8}$

12) $\left(-\frac{10}{7}\right) + \frac{1}{6}$

13) $\frac{9}{5} + \left(-\frac{4}{3}\right)$

14) $2 - \frac{13}{8}$